

Math Packet

For Students Entering 6th Grade

Hello Incoming 6th Graders!

Please complete this packet to keep your math skills sharp over the summer. It will be due the first day of school. Please work on the pages a little at a time. Don't stress yourself out by waiting until the last minute.

Have a great summer, mature mathematicians!

Student's name _____

Parent's signature _____

NOTES

G groupings
E exponents
M multiply/divide
S subtract/add

Order of Operations

1. Parentheses and other grouping symbols
2. Exponents
3. Multiplication and division from left to right
4. Addition and subtraction from left to right



PRACTICE

1) $(13 + 19) \div (9 - 5)$

6) $(33 - 3^2) \div (-3 + 7)$

2) $(14 + 23 - 5) \div 4$

7) $(34 - 4) \div 3 + 3^2$

3) $3 \times 13 \times (3 - 8)$

8) $6 \times (9 - 4) + 5^2$

4) $(11 + 49) \div (9 - 4)$

9) $3 \times (14 + 3) - 5^2$

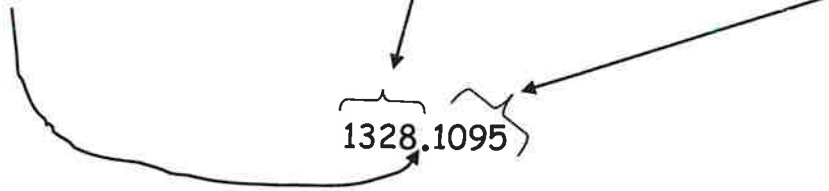
5) $(10 + 5) + 12 \div 4$

10) $(7 \times 10 + 4^2) + 2$

NOTES

Decimal Place Values

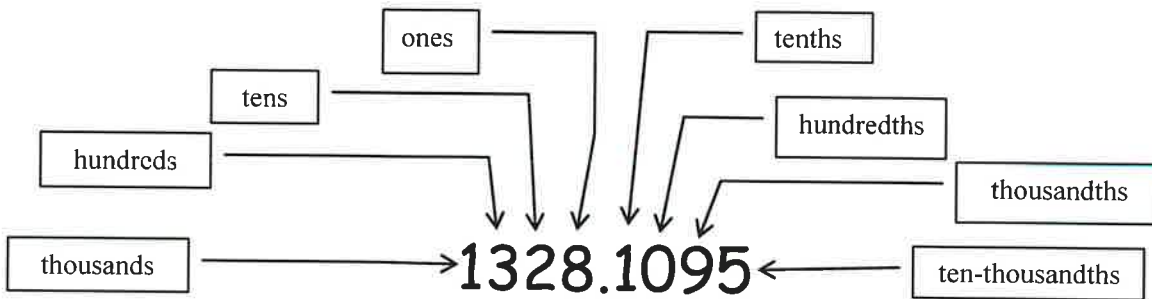
The decimal point separates the whole numbers from the fractional part of a number.



In a whole number the decimal point is all the way to the right, even if it is not shown in a problem.

$$25 = 25.$$

The place values of the number 1328.1095 are shown below:



The word "AND" is where the decimal point will go.



PRACTICE

- 1) In the number 2039.876, which digit is in the tenths place? _____
- 2) In the number 2039.876, which digit is in the tens place? _____
- 3) In the number 2039.876, which digit is in the thousands place? _____
- 4) In the number 2039.876, which digit is in the thousandths place? _____
- 5) In the number 6174.903, what digit is in the thousandths place? _____
- 6) In the number 6174.903, what digit is in the hundredths place? _____
- 7) In the number 6174.903, what digit is in the tenths place? _____
- 8) In the number 6174.903, what digit is in the ones place? _____

NOTES

Decimals can be written in standard, word, or expanded forms. For example, the number 34.215 can be written in:

- STANDARD FORM = 34.215
- WORD FORM = thirty-four and two hundred fifteen thousandths
- EXPANDED FORM = $(3 \times 10) + (4 \times 1) + (2 \times 0.1) + (1 \times 0.01) + (5 \times 0.001)$

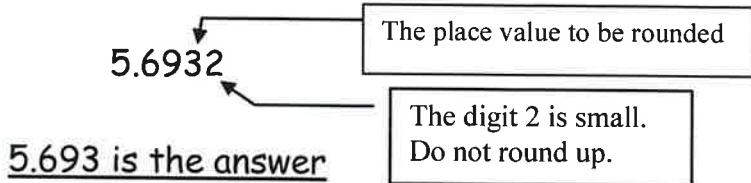
PRACTICE

WORD FORM	STANDARD FORM	EXPANDED FORM
Eighty-one hundredths		
Nine thousand thirty-four and seven tenths		
Five hundred nine thousandths		
	44.907	
	1.004	
	0.45	
		$(1 \times 0.01) + (3 \times 0.001)$
		$(2 \times 100) + (1 \times 1) + (4 \times 0.01) + (8 \times 0.001)$
		$(6 \times 1) + (7 \times 0.1)$

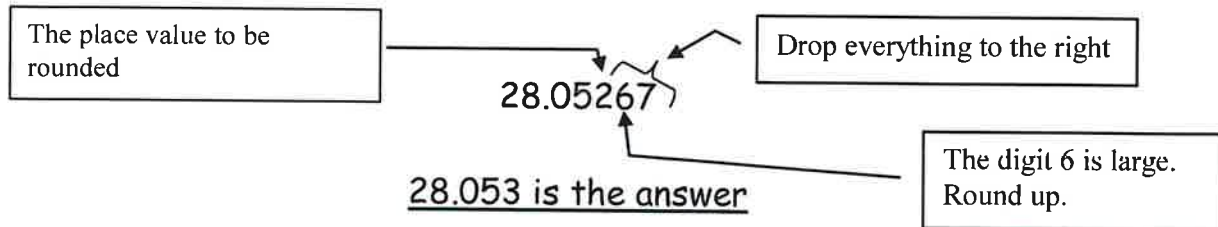
NOTES

Rounding Decimal Numbers

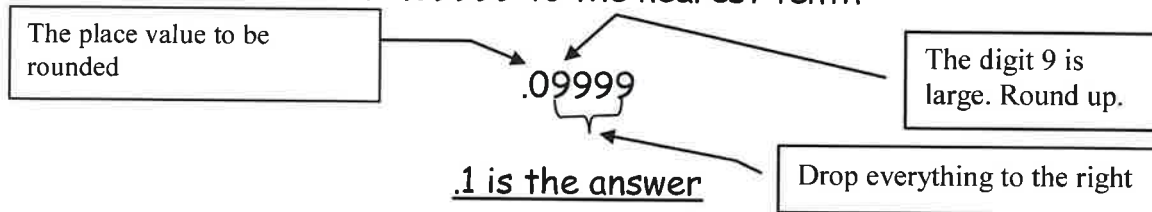
When rounding decimals, first look at the place value to be rounded. Then look at the digit immediately to its right. If that digit is less than 5 (0, 1, 2, 3, or 4), then do NOT round up. If the digit is 5 or more, then round up.



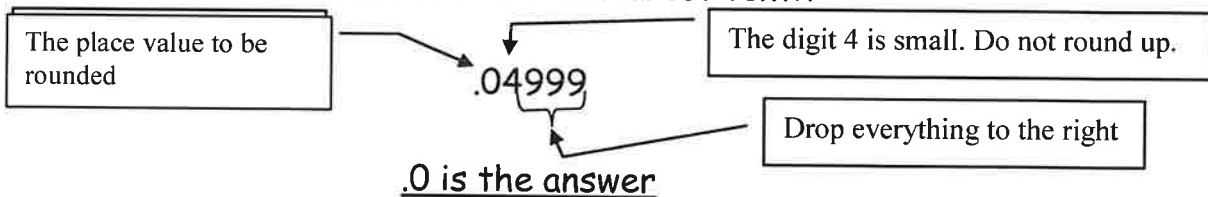
Round 28.05267 to the nearest thousandth



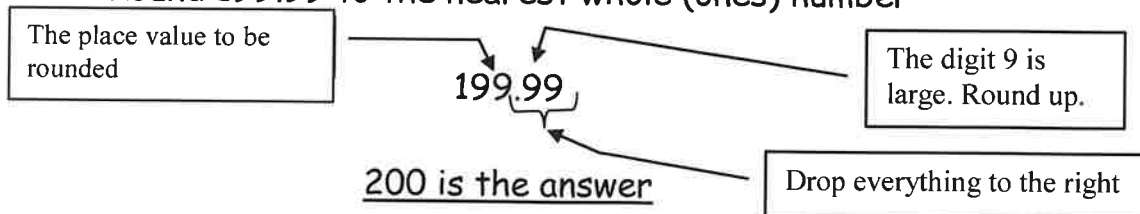
Round .09999 to the nearest tenth



Round .04999 to the nearest tenth



Round 199.99 to the nearest whole (ones) number



PRACTICE

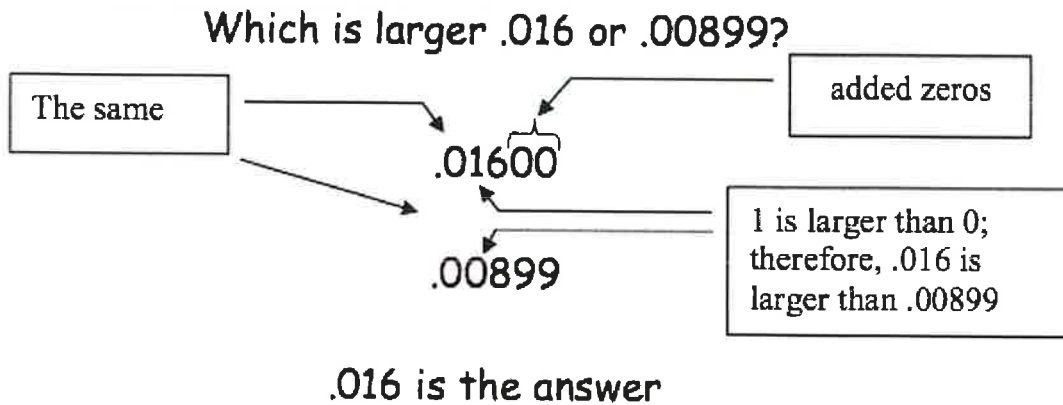
Round each decimal to the indicated place value.

- 1) .1325 to thousandths _____
- 2) .0091 to thousandths _____
- 3) .0196 to thousandths _____
- 4) 5.1234 to thousandths _____
- 5) 6.6666 to thousandths _____
- 6) 40.61884 to thousandths _____
- 7) 1.99999 to thousandths _____
- 8) .1325 to hundredths _____
- 9) .0091 to hundredths _____
- 10) .3333 to hundredths _____
- 11) 5.567 to hundredths _____
- 12) 48.001 to hundredths _____
- 13) 7.987 to tenths _____
- 14) .666 to tenths _____
- 15) 1.32 to tenths _____
- 16) 99.99 to tenths _____
- 17) .5 to whole (ones) number _____
- 18) 11.99 to whole (ones) number _____
- 19) 499 to the nearest hundred _____
- 20) 999 to the nearest thousand _____

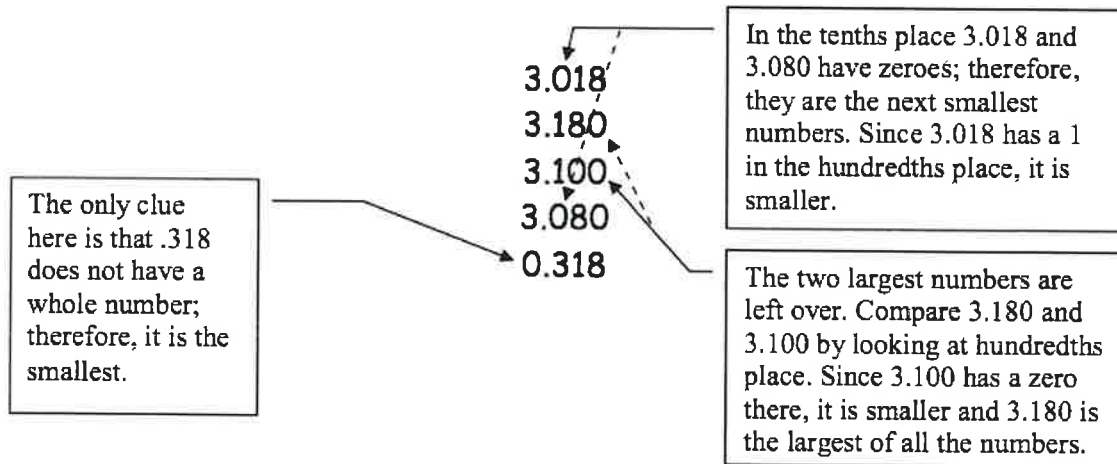
NOTES

Comparing and Ordering Decimals

When comparing and ordering decimals, it is usually easiest to line up the numbers vertically with the decimal points in a vertical line. If a number doesn't have a decimal point, place the decimal point at the end. You may fill in blank spaces with zeroes to make the columns easier to compare.



Example: Order the decimals from least to greatest.



ANSWER

.318 3.018 3.08 3.1 3.18

PRACTICE

Order these decimals from greatest to least.

1) 2.62 2.061 2.612 0.66 6.21

2) 14.01 140.1 1.401 14.1 14.11

3) .0067 .007 .00618 .00701 .006

4) .1 .01 1 1.1 .019

5) 5.1 5 5.01 5.09 5.91

Order these decimals from least to greatest.

6) 7.8 8.7 8.2 7.96 8.014

7) 0.15 .01 .1 .0101 .001

8) 94 93.999 93.909 93.99901 94.0001

9) 16.83 16.38 16.3 16.8 16

10) 3.49 3.489 3.4899 3.48999 3.48989

NOTES

Adding and Subtracting Decimal Numbers

When adding and subtracting decimal numbers, line up the decimal point of all the numbers. If a number does not show a decimal point, place one to the right of the whole number. You may add zeroes to keep the columns lined up.

Add 13.6 and 42.18

$$\begin{array}{r} 13.60 \\ + 42.18 \\ \hline 55.78 \end{array}$$

Add a zero

Add 1347 and .0005

$$\begin{array}{r} 1347.0000 \\ + .0005 \\ \hline 1347.0005 \end{array}$$

Add zeroes

Subtract 14.69 from 113.06

$$\begin{array}{r} 113.06 \\ - 14.69 \\ \hline 98.37 \end{array}$$

The wording here can be confusing. Notice how "subtract 14.69 from 113.06" means $113.06 - 14.69$

146 - 3.198

$$\begin{array}{r} 146.000 \\ - 3.198 \\ \hline 142.802 \end{array}$$

Add zeroes

PRACTICE

1)

$$\begin{array}{r} 8.7 \\ + 5.4 \\ \hline \end{array}$$

2) $74.906 + .01 + \overline{42} =$

3) $8416 + .28 + 1.489 =$

4)

$$\begin{array}{r} 38.64 \\ - 8.87 \\ \hline \end{array}$$

5) $462 - 31.2 =$

6) $16.001 - 12.984 =$

7) $.1 + 1.9 + 13 =$

8) $20 - 14.8 - .018 =$

9) $6 + 132.89 =$

10) $346.8912 - 29.98764$

11)

$$\begin{array}{r} 11.00001 \\ - 1.11234 \\ \hline \end{array}$$

12)

$$\begin{array}{r} 1234. \\ - \quad .1234 \\ \hline \end{array}$$

13) $124.8 + 3.79 - 118.965$

14) Subtract 6.8 from 14.2

15) Subtract 38.97 from 59

16) Add .001 to 87

17) Add 5000 to .0186

18)

$$\begin{array}{r} .40 \\ 3.80 \\ 26.91 \\ + 587.89 \\ \hline \end{array}$$

19)

$$\begin{array}{r} 143.012 \\ + 98.764 \\ \hline \end{array}$$

20) Subtract .001 from .01

NOTES

Multiplying Decimal Numbers

When multiplying decimal numbers, set up the problem like regular multiplication. When you get your answer, add up the total number of digits to the right of the decimals in both the numbers you are multiplying and place the decimal in your answer that many places from the right end.

$$\begin{array}{r} .02 \times .008 \\ \times .02 \\ \hline .00016 \end{array}$$

three digits
two digits
five digits
.00016 is the answer

$$\begin{array}{r} 20 \times .8 \\ \times .8 \\ \hline 16.0 \end{array}$$

16.0 is the answer

When multiplying three numbers together, multiply any two to get an answer; then multiply that answer by the third number.

$$\begin{array}{r} 1.02 \\ \times .3 \\ \hline .306 \\ \times 46 \\ \hline 1836 \\ \underline{1224} \\ 14.076 \end{array}$$

two digits
one digit
three digits
14.076 is the answer

PRACTICE

1) 1.67×3.2 2) $84.78 \times .612$ 3) $98.47 \times .7$ 4)
$$\begin{array}{r} .8842 \\ \times \times .002 \\ \hline \end{array}$$
 5)
$$\begin{array}{r} 5.76 \\ \times \times .25 \\ \hline \end{array}$$

6)
$$\begin{array}{r} 8.04 \\ \times .004 \\ \hline \end{array}$$
 7)
$$\begin{array}{r} 8.45 \\ \times \times .36 \\ \hline \end{array}$$
 8)
$$\begin{array}{r} 4.095 \\ \times \times .006 \\ \hline \end{array}$$
 9)
$$\begin{array}{r} 11.4 \\ \times \times 18 \\ \hline \end{array}$$
 10)
$$\begin{array}{r} 36 \\ \times 1.1 \\ \hline \end{array}$$

11)
$$\begin{array}{r} .001 \\ \times \times .001 \\ \hline \end{array}$$
 12)
$$\begin{array}{r} 8.88 \\ \times .88 \\ \hline \end{array}$$
 13)
$$\begin{array}{r} 12.34 \\ \times \times 43.21 \\ \hline \end{array}$$
 14)
$$.1 \times .1 \times .1$$

NOTES

Dividing Decimal Numbers

Here are the three ways you will see division problems; they all mean the same thing:

$$\frac{46.58}{2.1}$$

$$2.1 \overline{)46.58}$$

$$46.58 \div 2.1$$

When dividing decimal numbers, move the decimal point in the divisor (number you're dividing by) to the right end of the divisor. Then move the decimal point in the dividend (the number you're dividing into) the same number of places to the right as you moved it in the divisor.

$$2.1 \overline{)46.58}$$

$$.100 \overline{)8.100}$$

$$4 \overline{)6.1}$$

$$8 \overline{)11.0}$$

Once you have placed the decimal point correctly in your **quotient** (answer), divide like you would in whole numbers.

$$\begin{array}{r} 23 \\ 2 \overline{)4.6} \\ \underline{4} \\ 6 \\ \underline{6} \\ 0 \end{array}$$

$$\begin{array}{r} 20. \\ .26 \overline{)5.20} \\ \underline{52} \\ 0 \end{array}$$

$$\begin{array}{r} 9.4117 \\ 1.7 \overline{)16.00000} \\ \underline{153} \\ 70 \\ \underline{68} \\ 20 \\ \underline{17} \\ 30 \\ \underline{17} \\ 130 \\ \underline{119} \\ 11 \end{array}$$

Rounded to hundredth

$$1.7 \overline{)16.00000} = 9.41 \quad 15 \overline{)2.600} = .17$$

PRACTICE

Directions: Divide. Round answers to hundredths, if necessary

$$1) .3 \overline{) .69}$$

$$2) .82 \overline{) 16.4}$$

$$3) .002 \overline{) 4}$$

$$4) 1.4 \overline{) 280}$$

$$5) 25 \overline{) 4}$$

$$6) 37 \overline{) 1.68}$$

$$7) .66 \overline{) 15.18}$$

$$8) 1.87 \overline{) 3.96}$$

$$9) 329 \overline{) 2.303}$$

$$10) .64 \overline{) .14208}$$

$$11) 20 \overline{) .1}$$

$$12) .3 \overline{) 85}$$

$$13) 5.86 \overline{) 250}$$

$$14) .789 \overline{) 315.6}$$

$$15) 2.8 \overline{) 7.006}$$

NOTES

Word Problems with Decimals

Definitions: Sum - the answer from adding numbers
Difference - the answer from subtracting numbers
Product - the answer from multiplying numbers
Quotient - the answer from dividing numbers

In solving word problems, try to understand the whole situation being described. Some numbers may not even be involved in answering the question. Sometimes you will have to do extra steps to get the numbers you need to solve the problem.

If the annual rainfall for a town near Santa Fe was 12.3 inches in 1960, 13.2 inches in 1961, and 11.5 in 1962, what was the total rainfall for the three years?

$$\begin{array}{r} 12.3 \\ 13.2 \\ + 11.5 \\ \hline 37.0 \end{array}$$

"Total" means to add + 37.0 inches is the answer

What is the difference between David's salary of \$523.86 per month and Robert's monthly salary, which is \$318.90?

$$\begin{array}{r} 523.86 \\ - 318.90 \\ \hline 204.96 \end{array}$$

"Difference" means to subtract - \$204.96 is the answer

If you have a car that used 19.2 gallons of gas to go 285 miles, how many miles per gallon (mpg) did the car get? (round your answer to the nearest tenth.)

$$\text{mpg} = \frac{\text{miles}}{\text{gallon}} = \frac{285 \text{ miles}}{19.2 \text{ gallon}}; \text{ so divide } 19.2 \text{ into } 285$$
$$\begin{array}{r} 14.84 \\ 19.2 \overline{)285.000} \end{array}$$

14.8 mpg is the answer

You need to order three hinges for each of 15 doors. Each hinge costs \$.75. How much will the hinges cost?

$$\begin{array}{l} \text{The total number of hinges is } 3 \times 15 = 45 \\ \text{Multiply } 45 \times .75 = 33.75 \quad \$33.75 \text{ is the answer} \end{array}$$

PRACTICE

- 1) During five days, you drive 15.4 miles, 24.2 miles, 10.4 miles, 18.7 miles, and 7.5 miles. How many miles did you drive during those five days?
- 2) If you are given 3 checks, one for \$36.98, another for \$17.27, and a third for \$260, how much is the total of all 3 checks?
- 3) If a car gets 42.1 mpg on the highway, how many gallons of fuel will it use by traveling 340 highway miles? (round answer to tenths)
- 4) If you need to cut 5 pieces of glass from a 14 feet length, how long should each piece be?
- 5) If you purchase a TV and pay \$40 down and \$32.60 a month for 8 months, what was the purchase price of the TV?
- 6) If the revenues from the extra $\frac{1}{4}$ % sales tax amounted to \$48,136.47 in 1983 and is to be divided equally among 7 different departments within the city of Albuquerque, how much will each department receive? (round to the nearest cent)
- 7) If the total precipitation (rainfall and snow) for the year at a mountain town is expected to be 37.9 inches and it has already rained 26.82 inches, how many more inches of precipitation are expected?

MIXED DECIMALS PRACTICE

Change to decimals. (round to hundredths)

1) $\frac{2}{5}$

2) $\frac{1}{6}$

3) $\frac{3}{8}$

4) $5\frac{1}{2}$

Change to fractions (reduce, if possible)

5) .25

6) .66

7) 2.4

8) 42.875

Add

9) $\begin{array}{r} 3.7 \\ + 8.9 \\ \hline \end{array}$

10) $\begin{array}{r} 75.006 \\ 2.3 \\ 15.863 \\ + 246.9 \\ \hline \end{array}$

11) $8.1 + 268 + 49.64$

Subtract

12) $\begin{array}{r} 3.16 \\ - 1.87 \\ \hline \end{array}$

13) $162.8 - 46.96$

14) Subtract 1.97 from 15.1

Multiply

15) $\begin{array}{r} 5.82 \\ \times .78 \\ \hline \end{array}$

16) $\begin{array}{r} .165 \\ \times 74 \\ \hline \end{array}$

17) $.01 \times .167 \times .9$

Divide (round answers to hundredths)

18) $.7 \overline{) .49}$

19) $8.5 \overline{) .17}$

20) $.172 \overline{) 2}$

21) Arrange from largest to smallest
.808, .81, .8019, .807 .8

22) Arrange from smallest to largest
1.62, 1.6, 1.06, 1.16, 1.66

23) Subtract four and three-tenths from eleven and eighty-one hundredths.

24) If you ran 5.3 miles on Monday, 3.9 miles on Wednesday, and 4.7 miles on Friday, how many miles did you run, total, for the three days?

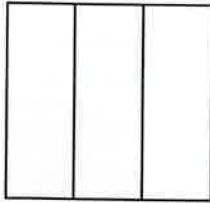
25) If you divided \$63.65 evenly among five children, how much would each child get?

26) If you bought 12.6 gallons of gasoline at \$1.20 per gallon, how much did the gasoline cost?

NOTES

Fractions

-A **fraction** is a symbol used to name a part of a whole, a part of a set, a location on a number line, or a division of whole numbers.



$\frac{2}{3}$ Numerator -number of parts of the whole
 Denominator -total number of equal parts

The larger the denominator the smaller each piece of the whole is. This is because the whole needs to be separated into more pieces.

Improper Fractions

An improper fraction has a numerator greater than its denominator.

A mixed number has a whole number and a fraction.



$$= \frac{7}{3} = 2\frac{1}{3}$$



PRACTICE

Write the fraction for each situation.

1. It's 25 miles to Gramma's. We have already driven 11 miles. What fraction of the way have we driven?
2. A pizza was cut into twelve slices. Seven were eaten. What fraction of the pizza was eaten?
3. There are 24 students in a class. 8 have passed the fractions test. What fraction of the students have passed fractions?

Converting Mixed Numbers & Improper Fractions

***Use division to convert an improper fraction into a mixed number.**

Step 1: Divide the numerator by the denominator

$$\frac{12}{8} \quad 8 \overline{)12}$$
$$\begin{array}{r} 1 \\ 8 \overline{)12} \\ \underline{-8} \\ 4 \end{array}$$

Step 2: Write the remainder as a fraction (over the denominator)

$$\frac{4}{8}$$

Step 3: Write your answer as a mixed number and simplify if necessary

$$1 \frac{4}{8} \div 2 = 1 \frac{2}{4}$$

***Use multiplication to convert a mixed number into an improper fraction.**

Step 1: Multiply the whole number by the denominator.

$$\begin{array}{r} 3 \underline{3} \\ \swarrow 4 \end{array} \quad 3 \times 4 = 12$$

Step 2: Add your answer to the numerator

$$12 + 3 = 15$$

Step 3: Put the new numerator over the old denominator.

$$\frac{15}{4}$$

PRACTICE

Write the mixed number for each improper fraction.

1a. $\frac{55}{18}$

1b. $\frac{38}{12}$

1c. $\frac{20}{15}$

2a. $\frac{45}{3}$

2b. $\frac{14}{10}$

2c. $\frac{48}{15}$

3a. $\frac{29}{20}$

3b. $\frac{34}{18}$

3c. $\frac{20}{2}$

Write the improper fraction for each mixed number.

1a. $2\frac{11}{15}$

1b. $18\frac{2}{9}$

1c. $18\frac{7}{19}$

2a. $8\frac{8}{10}$

2b. $15\frac{16}{17}$

2c. $18\frac{10}{13}$

3a. $14\frac{15}{16}$

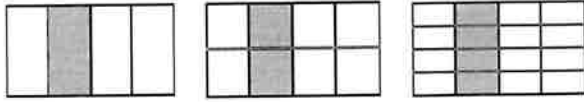
3b. $11\frac{4}{7}$

3c. $17\frac{3}{16}$

Notes

Equivalent Fractions

Equivalent fractions are fractions that name the **AMOUNT** in different ways.



$$\frac{1}{4} = \frac{2}{8} = \frac{4}{16}$$

To find equivalent fractions by using **MULTIPLICATION**, multiply the original fraction by a fraction that represents **ONE WHOLE**.

$$\frac{1}{3} \times \frac{2}{2} = \frac{2}{6} \times \frac{2}{2} = \frac{4}{12}$$

To find equivalent fractions by using **DIVISION**, divide the original fraction by a common factor of the numerator and denominator.

$$\frac{30}{42} \div \frac{6}{6} = \frac{5}{7}$$



PRACTICE

Find the missing numerator or denominator.

1a. $\frac{\quad}{3} = \frac{4}{12}$

1b. $\frac{2}{1} = \frac{30}{\quad}$

1c. $\frac{1}{2} = \frac{3}{\quad}$

2a. $\frac{\quad}{1} = \frac{50}{5}$

2b. $\frac{2}{\quad} = \frac{20}{10}$

2c. $\frac{5}{20} = \frac{1}{\quad}$

3a. $\frac{12}{\quad} = \frac{60}{5}$

3b. $\frac{21}{6} = \frac{7}{\quad}$

3c. $\frac{1}{\quad} = \frac{5}{5}$

Notes

Simplifying or Reducing Fractions

To simplify or reduce a fraction, divide both the numerator and denominator by the **GREATEST COMMON FACTOR**. If you do not know the greatest common factor, then keep dividing the fraction by a common factor until the only common factor is one.

$$\begin{array}{ccc} \div 2 & & \div 3 \\ \curvearrowright & & \curvearrowright \\ \frac{12}{54} = \frac{6}{27} = \frac{2}{9} & \text{OR} & \frac{12}{54} \div \frac{6}{6} = \frac{2}{9} \\ \curvearrowleft & & \curvearrowleft \\ \div 2 & & \div 3 \end{array}$$



PRACTICE

Simplify or reduce each fraction.

1a. $\frac{4}{16}$

1b. $\frac{10}{26}$

1c. $\frac{18}{18}$

2a. $\frac{6}{27}$

2b. $\frac{3}{48}$

2c. $\frac{10}{40}$

3a. $\frac{15}{48}$

3b. $\frac{3}{45}$

3c. $\frac{4}{24}$

4a. $\frac{20}{50}$

4b. $\frac{7}{35}$

4c. $\frac{9}{39}$

5a. $\frac{8}{56}$

5b. $\frac{18}{33}$

5c. $\frac{12}{20}$

NOTES

Comparing and Ordering Fractions

Step 1: Find a common denominator (LCM) $\frac{2}{3}$ $\frac{7}{12}$ $\frac{5}{8}$

Step 2: Find equivalent fractions using the common denominator

3	3, 6, 9, 12, 16, 28, 21, 24	$2 \times 8 = \underline{16}$	$7 \times 2 = \underline{14}$	$5 \times 3 = \underline{15}$
12	12, 24 , 36	$3 \times 8 = \underline{24}$	$12 \times 2 = \underline{24}$	$8 \times 3 = \underline{24}$
8	8, 16, 24			

Step 3: Compare/Order $\frac{14}{24} < \frac{15}{24} < \frac{16}{24}$ so $\frac{7}{12} < \frac{2}{3} < \frac{5}{8}$



PRACTICE

Compare the fractions by using $>$, $<$, or $=$.

1a. $\frac{4}{12} \square \frac{1}{2}$	1b. $\frac{5}{11} \square \frac{1}{2}$	1c. $\frac{8}{8} \square \frac{11}{12}$
2a. $\frac{2}{4} \square \frac{11}{11}$	2b. $\frac{3}{10} \square \frac{2}{4}$	2c. $\frac{11}{12} \square \frac{11}{11}$
3a. $\frac{1}{2} \square \frac{1}{6}$	3b. $\frac{4}{5} \square \frac{9}{9}$	3c. $\frac{1}{2} \square \frac{6}{11}$

Order the fractions from LEAST to GREATEST.

1a. $\frac{6}{11}, \frac{8}{11}, \frac{5}{11}$	1b. $\frac{1}{7}, \frac{3}{11}, \frac{1}{2}$
2a. $\frac{8}{12}, 1\frac{8}{11}, \frac{8}{9}$	2b. $\frac{1}{2}, \frac{3}{8}, 1\frac{1}{4}$
3a. $\frac{8}{12}, \frac{7}{12}, \frac{3}{12}$	3b. $1\frac{4}{8}, \frac{1}{10}, 1\frac{2}{3}$

NOTES

Adding & Subtracting Fractions with LIKE Denominators

Step 1: Make sure the denominators are the same $\frac{5}{10} + \frac{3}{10} =$

Step 2: Add or subtract the numerators $\frac{5}{10} + \frac{3}{10} = \frac{8}{10}$

Step 3: The denominator stays the same $\frac{5}{10} + \frac{3}{10} = \frac{8}{10}$

Step 4: Simplify if necessary $\frac{8}{10} \div 2 = \frac{4}{5}$

Adding & Subtracting Fractions with LIKE Denominators

Step 1: Find an equivalent fraction for both fractions, so that they both have the same denominator

$\frac{4}{8} + \frac{1}{6} =$ a) find the LCM of the denominators $8: 8, 16, 24, 32$
 $6: 6, 12, 18, 24, 30$

b) find the equivalent fraction $\frac{4}{8} \times \frac{3}{3} = \frac{12}{24}$ $\frac{1}{6} \times \frac{4}{4} = \frac{4}{24}$

Step 2: Once the denominators are the same, add or subtract the numerators

$$\frac{12}{24} + \frac{4}{24} = \frac{16}{24}$$

Step 3: The denominator stays the same

$$\frac{12}{24} + \frac{4}{24} = \frac{16}{24}$$

Step 4: Simplify if necessary

$$\frac{16}{24} \div 8 = \frac{2}{3}$$

PRACTICE

Find the sum.

$$1a. \frac{4}{11} + \frac{9}{4} =$$

$$1b. \frac{10}{11} + \frac{1}{6} =$$

$$2a. \frac{1}{11} + \frac{5}{9} =$$

$$2b. \frac{9}{7} + \frac{5}{4} =$$

$$3a. \frac{9}{8} + \frac{9}{4} =$$

$$3b. \frac{6}{9} + \frac{6}{9} =$$

$$4a. 4\frac{1}{2} + 5\frac{1}{4} =$$

$$4b. 9\frac{2}{12} + 3\frac{3}{4} =$$

$$5a. 2\frac{7}{8} + 10\frac{1}{3} =$$

$$5b. 7\frac{1}{4} + 9\frac{1}{3} =$$

$$6a. 4\frac{5}{12} + 3\frac{3}{4} =$$

$$6b. 3\frac{2}{4} + 6\frac{6}{9} =$$

PRACTICE

Find the difference.

$$1a. \frac{4}{2} - \frac{2}{10} =$$

$$1b. \frac{7}{8} - \frac{1}{10} =$$

$$2a. \frac{4}{5} - \frac{2}{5} =$$

$$2b. \frac{6}{4} - \frac{10}{11} =$$

$$3a. 7\frac{6}{8} - \frac{11}{3} =$$

$$3b. 5\frac{2}{6} - \frac{1}{3} =$$

$$4a. 7\frac{2}{10} - \frac{1}{2} =$$

$$4b. 10\frac{4}{7} - \frac{6}{8} =$$

$$5a. 8\frac{1}{2} - 8\frac{4}{9} =$$

$$5b. 11\frac{5}{6} - 4\frac{4}{10} =$$

$$6a. 8\frac{5}{8} - 7\frac{2}{3} =$$

$$6b. 9\frac{8}{9} - 1\frac{8}{10} =$$

WORD PROBLEMS PRACTICE

1. Find the total width of 3 boards that $1\frac{3}{4}$ inches wide, $\frac{7}{8}$ inch wide, and $1\frac{1}{2}$ inches wide.
2. A 7.15H tire is $6\frac{5}{8}$ inches wide and a 7.15C tire is $4\frac{3}{4}$ inches wide. What is the difference in their widths?
3. A patient is given $1\frac{1}{2}$ teaspoons of medicine in the morning and $2\frac{1}{4}$ teaspoons at night. How many teaspoons total does the patient receive daily?
4. $3\frac{1}{3}$ feet are cut off a board that is $12\frac{1}{4}$ feet long. How long is the remaining part of the board?
5. $\frac{3}{8}$ of the corn in the U.S. is grown in Iowa. $\frac{1}{4}$ of it is grown in Nebraska. How much of the corn supply is grown in the two states?

6. A runner jogs $7\frac{1}{5}$ miles east, $5\frac{1}{4}$ miles south, and $8\frac{2}{3}$ miles west. How far has she jogged?

7. If $3\frac{1}{2}$ ounce of cough syrup is used from a $9\frac{1}{4}$ ounce bottle, how much is left?

8. I set a goal to drink 64 ounces of water a day. If I drink $10\frac{1}{3}$ ounces in the morning, $15\frac{1}{2}$ ounces at noon, and $20\frac{5}{6}$ ounces at dinner, how many more ounces of water do I have to drink to reach my goal for the day?

9. Three sides of parking lot are measured to the following lengths: $108\frac{1}{4}$ feet, $162\frac{3}{8}$ feet, and $143\frac{1}{2}$ feet. If the distance around the lot is $518\frac{15}{16}$ feet, find the fourth side.

10. Gabriel wants to make five banners for the parade. He has 75 feet of material. The size of four of the banners are: $12\frac{1}{3}$ ft., $16\frac{1}{6}$ ft., $11\frac{3}{4}$ ft., and $14\frac{1}{2}$ ft. How much material is left for the fifth banner?

NOTES

Multiplying Fractions

Step 1: Multiply the Numerators $\frac{4}{5} \times \frac{3}{8} = \frac{12}{40}$

Step 2: Multiply the Denominators $\frac{4}{5} \times \frac{3}{8} = \frac{12}{40}$

Step 2: Simplify if necessary. $\frac{12}{40} \div 4 = \frac{3}{10}$

Multiplying Whole Numbers and Mixed Numbers

Step 1: Change the whole number or mixed number to an improper fraction.

Step 2: Follow the rules for multiplying fractions.

$$1 \frac{3}{4} \times 2 \frac{1}{2} = ?$$

$1 \times 4 + 3 = 7$
 $2 \times 2 + 1 = 5$

$$\frac{7}{4} \times \frac{5}{2} = \frac{35}{8} = 4 \frac{3}{8}$$

PRACTICE

Find the product.

1a. $\frac{5}{6} \times \frac{5}{12} =$

1b. $\frac{8}{12} \times \frac{8}{11} =$

2a. $\frac{5}{12} \times \frac{9}{10} =$

2b. $\frac{2}{12} \times \frac{1}{6} =$

$$3a. 8 \times \frac{8}{11} =$$

$$3b. 3 \times \frac{5}{6} =$$

$$4a. \frac{7}{12} \times 1 =$$

$$4b. \frac{7}{8} \times 3 =$$

$$5a. 4\frac{9}{12} \times 3\frac{1}{2} =$$

$$5b. 10\frac{1}{9} \times 8\frac{8}{10} =$$

$$6a. 9\frac{1}{3} \times 2\frac{2}{10} =$$

$$6b. 9\frac{4}{7} \times 7\frac{1}{4} =$$

NOTES

Dividing Fractions and Mixed Numbers

Step 1: Rewrite any whole numbers or mixed numbers as improper fractions.

Step 2: Keep the first fraction.

Step 3: Change the division sign to multiplication.

Step 4: Flip the second fraction to its reciprocal.

Step 5: Follow the rules for multiplying fractions.

<p><i>Example 1</i></p> $\frac{1}{3} \div \frac{4}{5}$ <p>flip the second fraction... and multiply!</p> $\frac{1}{3} \times \frac{5}{4} = \frac{5}{12}$	<p><i>Example 2</i></p> $1\frac{2}{7} \div 5 = \frac{9}{7} \div \frac{5}{1} = \frac{9}{7} \times \frac{1}{5}$ $= \frac{9 \times 1}{7 \times 5} = \frac{9}{35}$
---	--



PRACTICE

Find the quotient.

1a. $\frac{2}{12} \div \frac{2}{10} =$

1b. $\frac{3}{12} \div \frac{3}{5} =$

2a. $\frac{7}{12} \div \frac{4}{5} =$

2b. $\frac{1}{2} \div \frac{2}{4} =$

$$3a. \frac{3}{12} \div 10 =$$

$$3b. \frac{3}{12} \div 6 =$$

$$4a. \frac{5}{8} \div 5 =$$

$$4b. \frac{1}{11} \div 7 =$$

$$5a. 7 \div \frac{7}{8} =$$

$$5b. 7 \div \frac{4}{10} =$$

$$6a. 4 \div \frac{8}{11} =$$

$$6b. 4 \div \frac{4}{10} =$$

$$7a. 7\frac{2}{8} \div \frac{4}{6} =$$

$$7b. 4\frac{8}{10} \div \frac{4}{11} =$$

$$8a. \frac{2}{9} \div 10\frac{2}{7} =$$

$$8b. \frac{6}{7} \div 5\frac{5}{6} =$$